



DELHI PUBLIC SCHOOL RAMPURHAT

MIDTERM

SESSION: 2024-2025

SUBJECT: ENGLISH

CLASS – IV

Time Allowed: 2hr. 15 min.

Max. Marks: 50

General Instructions:

(i) First 15 minutes are allowed only for reading the question paper. Students must NOT start writing during this time. (ii) This question paper consists of 3 printed pages

Section A Reading Comprehension

(1X5=5 Marks)

1. Read the passage and answer the questions below.

Our Friendly Neighbours

My name is Maria and I live in Mumbai with my grandparents, parents, and my naughty younger brother. Our neighbours are the Naiks, who live in the penthouse. They have a pet, the friendly Beagle, named Oliver. Mr Naik always takes Oliver for a walk in the morning and comes back with little goodies for my brother and me. Mrs Naik is a great cook and whenever they cook anything the aroma floods our house and all of us keep dreaming what it is. Their children are married and live outside Mumbai.

One day, my mom was unwell and had to be hospitalised for a few days, my dad was wondering how to manage food for us. The Naiks came home and told my parents not to worry and they will manage our kitchen. Everyday, they used to come to our house in the morning by 6. 30 am and make our breakfast & lunch, which was always something different and tasty. They used to cook dinner at their home and send it to us. My grandparents also love their cooking.

My dad told me that time, it is a great virtue to help one another at times of need which I will always remember thanks to the Naiks.

1. How many people are there in Maria's house?
2. Where were the Naiks living?
3. Who was hospitalised and what was the issue because of that?
4. What did Maria learn from this incident?
5. Write down 3 good qualities you think one should have.

Section B- Writing and Grammar

2. Write a story on your favourite topic.

(5x1=5 Marks)

Do as Directed:

3. Complete the sentences using Present Simple or Present Continuous: (1x3=3 Marks)
- a) The swimming pool _____ (close) at 8:30 p.m.
 - b) I _____ (not believe) your story. I think you _____ (not tell) the truth.
 - c) Look at that dog. It _____ (belong) to Aarthi.
4. Choose for or since. (1x2=2 Marks)
- a) My parents have lived in this city since/for I was born.
 - b) Our volleyball team hasn't won a game since/for six months.
5. Complete the sentences using Present Perfect or Present Perfect Continuous: (1x4=4)
- a) I _____ (already have) breakfast.
 - b) How long _____ (you/watch) TV?
 - c) _____ (they/practise) the new song since this morning?
 - d) I _____ (travel) with my grandparents.
6. Write the correct form of the verb given in brackets: (1x3=3 Marks)
- a) The man in the car _____ (look) like your father.
 - b) The troupe of dancers _____ (perform) here.
 - c) One of the doors _____ (be) open.
7. Write the correct possessive nouns for the following sentences: (1x3=3 Marks)
- a) The _____ instruments were expensive. (musicians)
 - b) Have you seen _____ camera? (Biswas)
 - c) _____ skin have stripes. (zebras)
8. Write sentences in positive and question forms: (1x2=2 Marks)
- a) We haven't worked here for two years.
 - b) Meera hasn't been in London since Friday.
9. Fill in the blanks with a, an, or the. (1x1=1 Mark)
- a) The tourists went to see _____ Taj Mahal on _____ full moon night.

Section C- Literature

10. Write TRUE or FALSE: (1x5=5 Marks)
- a) The genie of the lamp took Aladin to his palace.
 - b) After escaping Androcles lived in a treehouse.
 - c) Almighty God is the creator of each great and minute thing.
 - d) The Shoemaker and the Elves is adopted from Graham's Fairy Tales.
 - e) Eletelephony is a nonsense poem.

11. Fill in the Blanks with Textual Words:

(1x5=5 Marks)

- a) Aladin and his mother were very _____.
- b) Multimeter checks _____.
- c) _____ is the writer of the story named 'Why the Cricket Chirps?'
- d) The shoemaker made only one pair of shoes because _____.
- e) The elves worked hard only at night because _____.

12. Answer the following questions:

- a) Through what the Star often peeps? (1)
- b) How the star helps a traveller? (1)
- c) What did the lion do when he saw Androcles, his old friend? (1)
- d) "Uff! I'll just wear the crumpled shirt." (1+1)
 - 1) Who said this and to whom?
 - 2) Why did the speaker have to wear the crumpled shirt?
- e) Who wrote the poem "All Things Bright and Beautiful"? (1)
- f) How does the cricket tell us how cold or hot it is? (2)
- g) "It's a miracle"- What is a miracle in this text- 'The Shoemaker and the Elves'? (2)



DELHI PUBLIC SCHOOL RAMPURHAT

MID-TERM EXAMINATION

SESSION: 2024-2025

SUBJECT: BENGALI

CLASS – IV

Time Allowed: 2 Hrs 15 Mins

Max. Marks: 50

General Instructions:

- (i) First 15 minutes are allowed only for reading the question paper. Students must NOT start writing during this time.
- (ii) This question paper consists of 2 printed pages.

Section A

1) নীচরে অংশটি ভালো করে পড়ে প্রদত্ত প্রশ্নগুলোর উত্তর দাও : (1×5=5)

একথা আজকাল অনেকেই স্বীকার করেন, মানুষের দহেরে ভতিরে এমন কোন সুব্ধবস্থা আছে, যাহাতো কোন চর্কিঁসকরে সাহায্য ব্ধতীত রোগী রোগ মুক্ত হইতে পারে। শরীরের কোন বশিষে ধর্ম্মে, বনি চর্কিঁসায় আমরা নরিোগ হই, এই রহস্যটি আবশ্চিকারেরে জন্ধ এক শতাব্দী ধরয়া বজ্ঞ্ঞানকিগণ কঠোর তপস্যার মগ্ন ছিলিনে।

প্রায় একশত বছর পূর্বে জনোর নামক জনকৈ চর্কিঁসক বসন্ত রোগেরে চর্কিঁসায় গো-বীজেরে টকি দতিে আরম্ভ করছিলিনে। একটু সামান্ধ গো-বীজ দহেস্ত করলিে কি প্রকার বসন্তেরে আক্রমণ হইতে রক্ষা পাওয়া যায়, তঁকালীন বড় বড় চর্কিঁসকরোও তাহা স্থরি করতিে পারনে নাই। কনিত্ত সকলেই এই কথা বুঝছিলিনে, বধিতা যদেনি প্রাণীর দহে প্রাণ প্রতষ্টিতা করিয়াছিলিনে, সদেনি প্রাণ রক্ষার উপায়টিও দহেরে মধ্ধে যোগনা করিয়া দিয়াছিলি। ইহার পর সুবধিতাত ফরাসি বজ্ঞ্ঞানকি পাস্তুর আরোগ্ধ তত্বেরে ওপর এক নতুন আলোকপাত করলিনে। তিনি বহু গবষণার দ্বারা সদিধান্ত করলিনে, ব্ধাধি বীজ দলিে যেনে দুগ্ধ গাজিয়া ওঠে, তেনে দহেরে প্রবশে করলে একপ্রকার গাজনি শুরু হয়। ব্ধাধি য়ে আবার বীজ আছে, চর্কিঁসকগণ এই প্রথম শুনিয়াছিলিনে। ব্ধাধিবীজ সংগ্রহ করিয়া পাস্তুর সাহবে নানা ইতর প্রাণীর শরীরে প্রবশে করিয়া করাইতে লাগলিনে। প্রাণীদহে ব্ধাধি দখো দতিে লাগলি। তঁ পরে এই সকল প্রাণীর দহে হইতে বীজ সংগ্রহ করিয়া অপর প্রাণীর শরীরে প্রয়োগ করা হইল। বারবার এই প্রক্রিয়ার ফলে দখো গলে বীজ শক্তি কমিয়ে আসতিছে। এই হতবীর্ধ বীজ তিনি মানবদহে প্রয়োগ করিয়া দখেলিনে, মানবদহে হীরার সামান্ধ লক্ষণ প্রকাশ পাইল বটে, কনিত্ত ব্ধাধি আক্রমণ হইতে চরিকালেরে জন্ধ দহেটি রক্ষা পাইয়া গলে। জলাতঙ্ক রোগেরে চর্কিঁসা পদধর্তা পাস্তুর এই প্রথাতই আবশ্চিকার করলিনে। বাস্তু শিষ্যবর্গ গুরু প্রদর্শতি পথে বহু পরীক্ষা করতিে লাগলিনে শষে আবশ্চিকার করলনে পরিামজি দহে প্রবশে করিয়া পীড়া নবিারণ না করলিেও চলে। তাহার ব্ধতি জীবেরে দহে হইতে রক্তেরে লালাবঁ স্বচ্ছ অংশটি গ্রহণ করিয়া মানবদহে প্রবশে করাইতে লাগলিনে। ইহাতো লোককে ব্ধাধি আক্রমণ লইতে রক্ষা পতে লাগলি। তাহারা প্রচার করলিনে- এই রক্তেরে স্বচ্ছ লালার শহীদ ব্ধাধিকিন পদার্থ মশিরতি থাকে। ইহা মানুষেরে প্রস্তুত নয়, প্রাণীকে ব্ধাধিমুক্ত করবার জন্ধ স্বয়ং প্রক্তি দবী দহেরে কর্মশালায় তাহা প্রস্তুত করেনে। এই ব্ধাধিগিন রক্ত লালো অ্যান্টিটিকসনি নামে পরিচিতি। ব্ধতি প্রাণীর রক্তেরে লালার সাহায্যে আজকাল নানা ডিপথরিয়া রোগেরে চর্কিঁসা হইতে হইতেছে। তারা পাস্তুরেরে শিষ্য বর্গেরে প্রবর্ততি।

- A) কে বসন্ত রোগেরে টকি আবশ্চিকার করেনে?
- B) পাস্তুর কেথাকার বজ্ঞ্ঞানকি?
- C) বধিতা কখনপ্রাণরক্ষার উপায়টি যোগনা করছিলিনে?

D) আন্টকিসনি কা?

E) পদপরিবর্তন কর : শরীর

Section B

2) সঠিক উত্তর লেখো :

(1×5=5)

a) গয়ে গান নাচে (ময়ূর / বাউল / কোকিল)।

b) টুনটুনি (গোলাপ / বগুন / বনে) গাছে কাঁটার খোঁচা খয়েছিল।

c) অপ্সরী (রম্ভা / মনকা / উর্বশী) শকুন্তলাকে তপোবনে ফলে রেখে গলে।

d) (বনহাঁস / পানকোড়া / বক) ডুব দিচ্ছে জলে

e) পাঁপড়ে আশ্রয় নিয়েছে একটা (বটরে / কাশরে / ঘাসরে) পাতায়

3) নীচের প্রশ্নগুলোর উত্তর সম্পূর্ণ বাক্যে দাও।

(1×5=5)

a) মঘেরে ফাঁকে কে হাসছে?

b) ঘোমটা দেওয়া বোটী নদীতে কি করছে?

c) পাঁপড়ে কোথায় আশ্রয় নিয়েছিল?

d) শকুন্তলা কার কোলে পঠি মানুষ হয়েছিল?

e) রাজা কি দিয়ে বহিঁনা পাত?

4) নীচের বিপরীত শব্দ গুলো লেখো :

(1×5=5)

a) ওস্তাদ

b) বদিশে

c) মন্থর

d) মধুর

e) সাঙু

5) "সকলি ছিল, ছিল না কবেল - আঁধার ঘররে মানকি ছোটো ময়ে - শকুন্তলা" -কার লেখা কোন গদ্যরে অংশ? শকুন্তলা কে ফলে গছিল? কারা কি ভাবে শকুন্তলা কে কুড়িয়ে পলে? (2+1+2)=5

6) "বাজিয়ে রবিতোমার বীনআনলো মালা জগৎ জনি"।

কার লেখা কোন পদ্যরে অংশ? এখানে রবী বলতে কাকে বোঝানো হয়েছে? তনি কি ভাবে কোথাথকে মালা জয় করছিলে?

(2+1+2)=5

Section C

7) নীচের প্রশ্নগুলোর উত্তর দাও।

(1×10=10)

a) ব্যঞ্জবর্ণ কাকে বলে?

b) বাক্যে কয়টা অংশ থাকে?

c) কণ্ঠবর্ণ কাকে বলে? উদাহরণ দাও।

d) বিশেষ্য পদ কাকে বলে?

e) হ্রস্বস্বর কাকে বলে?

f) বাক্যে উদ্দেশ্য কাকে বলে?

g) সমার্থক শব্দ লেখো: চোখ

h) সমার্থক শব্দ লেখো: আকাশ

i) পদপরিবর্তন কর : ঘর

j) পদপরিবর্তন কর : অর্থ

8) তোমার প্ৰিয় উৎসব এই বিষয়ে ১০ টি বাক্য লেখো :

(10×1=10)



DELHI PUBLIC SCHOOL RAMPURHAT

MID-TERM EXAMINATION

SESSION: 2024-2025

SUBJECT: HINDI

CLASS : IV

Time Allowed: 2Hrs 15Mins

Max.Marks: 50

सामान्य निर्देश :-

- * अतिरिक्त 15 मिनट का समय सिर्फ प्रश्न पत्र को ध्यानपूर्वक पढ़ने के लिए दिया गया है।
- * इस प्रश्न पत्र को तीन खंडों में विभक्त किया गया है:-
खंड- क(अपठित बोध) खंड- ख(पाठ्यपुस्तक एवं व्याकरण) खंड- ग(लेखन शैली)
- * सभी प्रश्न अनिवार्य हैं, प्रश्नों के उत्तर यथासंभव अपने शब्दों में लिखने का प्रयास करें।
- * इस प्रश्न पत्र में कुल 3 मुद्रित पृष्ठ हैं।

खंड- क(अपठित बोध)

प्रश्न 1. निम्नलिखित गद्यांश को ध्यानपूर्वक पढ़िए और पूछे गए प्रश्नों के उत्तर दें: (1x5=5)

कार्टूनों की अपनी दुनिया है, ठीक मनुष्यों की दुनिया की तरह लुभावनी। कार्टून ऐसा चित्र होता है, जिसे देखकर मन खुश हो जाता है। आजकल तो कार्टूनों के माध्यम से रोचक कार्यक्रम दिखाए जाने लगे हैं। कार्टून बच्चों को ही नहीं बड़ों को भी अच्छे लगते हैं। नीरस और उबाऊ विषय भी कार्टून के द्वारा सरस व रोचक बन जाते हैं। इसलिए बच्चे कार्टून की किताब मिलते ही उस पर झपट पड़ते हैं और जब तक वह खत्म न हो जाए पढ़ना, खेलना, सोना यहाँ तक कि खाना भी भूल जाते हैं। जब ये कार्टून दूरदर्शन पर दिखाए जाते हैं तो इन जीते जागते, हँसते-बोलते कार्टूनों में सब खो जाते हैं।

प्रश्न क) कार्टून क्या होते हैं?

प्रश्न ख) कार्टून की दुनिया कैसी होती है?

प्रश्न ग) कार्टून सबको इतने अच्छे क्यों लगते हैं?

प्रश्न घ) आजकल किसके माध्यम से रोचक कार्यक्रम दिखाए जा रहे हैं?

प्रश्न ड.) बच्चों कार्टून की किताब पाकर क्या-क्या भूल जाते हैं?

खंड- ख(पाठ्यपुस्तक एवं व्याकरण)

प्रश्न 2. लघु उत्तरीय प्रश्न :-

(1x10=10)

- i) राजा ने सपने में क्या देखा था?
- ii) राजदरबार के सारे मंत्री क्यों परेशान थे?
- iii) चावल की फसल अच्छी क्यों नहीं हुई थी?
- iv) लोगों के पास कितना चावल बचता था?
- v) बच्चा रास्ते पर कैसे नहीं चलेगा?
- vi) पोंगल में किस-किस की पूजा की जाती है?
- vii) पौधे की कलम क्या होती है?
- viii) भालू ने किस समस्या के बारे में बताया?
- ix) हाथी ने अपने बारे में क्या कहा?
- x) शेर सबसे पहले किस बारे में बात कर रहा था?

प्रश्न 3. निम्न प्रश्नों के उत्तर एक शब्द में दें :-

(1x20=20)

- i) राज्य कृष्ण देव राय के सबसे बड़े कृपा पात्र कौन थे?
- ii) सारे मंत्री अपनी समस्या लेकर किनके पास गए?
- iii) कौन बूढ़े का नकली रूप धरण करके राजा कृष्णदेव राय के पास आया था?
- iv) राज्य के कर्मचारी प्रत्येक वर्ष चावल एकत्रित करके कहाँ जमा कर देते थे?
- v) दावत के लिए गोदाम से कितने बोरी चावल निकले गए?
- vi) राजा किसे इनाम देना चाहता था?
- vii) पोंगल किससे जुड़ा त्योहार है?
- viii) पोंगल त्योहार किस महीने में मनाया जाता है?
- ix) मयंक बगीचे में किसे काम करते हुए देख रहा था?
- x) बालू दादा किस जानवर का नाम था?
- xi) हिन्दी वर्णमाला में कितने स्वर होते हैं?
- xii) स्वरों के चिह्न को क्या कहते हैं?
- xiii) बनावट के आधार पर शब्द के कितने भेद होते हैं?
- xiv) वर्णों के सही मेल से क्या बनते हैं?
- xv) 'पुत्र' का स्त्रीलिंग शब्द क्या है?
- xvi) टोपी का बहुवचन रूप लिखिए।
- xvii) सर्वनाम के कितने भेद होते हैं?
- xviii) पुरुषवाचक सर्वनाम के कितने भेद होते हैं?
- xix) चार बच्चों खेलने आए हैं। इस वाक्य में 'चार' किस विशेषण का उदाहरण है?
- xx) विशेषण के कितने भेद होते हैं?

प्रश्न 4. दीर्घ उत्तरीय प्रश्न :-

(2x5=10)

- i) आलू का पौधा कैसे उत्पन्न होता है?
- ii) पोंगल कैसे पकाया जाता है?
- iii) राजा कब चिंतित हुआ और क्यों?
- iv) बुजुर्ग व्यक्ति ने राजा से अभयदान क्यों मांगा था?
- v) राजा, राधा से क्यों संतुष्ट हुए और उसके बदले में राधा ने राजा से क्या माँगा?

खंड-ग(लेखन शैली)

प्रश्न 5. 'खरगोश और कछुआ' विषय पर कहानी लिखिए।

(5)



DELHI PUBLIC SCHOOL RAMPURHAT

MID-TERM EXAMINATION

SESSION: 2024-2025

SUBJECT: MATHEMATICS

CLASS – IV

Time Allowed: 2Hrs and 15 mins

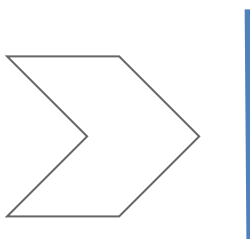
Max. Marks: 50

General Instructions:

- (i) First 15 minutes are allowed only for reading the question paper.
Students must NOT start writing during this time.
- (ii) This question paper consists of 2 printed pages.

SECTION-A (1 marks)

1. Choose the correct option: (1mx5 = 5m)
- A) 70 lakhs = _____ millions
- a. 70 b. 700 c. 0 d. 7
- B) 5 hundreds + 5 hundreds = _____ thousands
- a. 1 b. 5 c. 10 d. 100
- C) 600 less than 11527 is _____
- a. 10927 b. 927 c. 1927 d. 9270
- D) The smallest prime number is _____
- b. 0 b. 1 c. 2 d. 3
- E) ₹8650 = _____ notes of ₹50.
- a. 163 b. 173 c. 183 d. 193
2. Draw the mirror image of the following shape - (1mx1=1m)

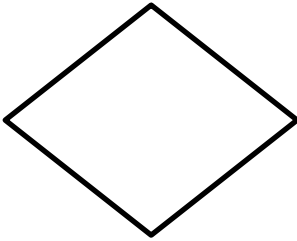


3. Write the Roman numerals - (1mx2=2m)
- a) CM -
- b) XL -
4. Fill the missing number - (0.5mx2=1m)
- 2929 + _____ = 3452 + _____
5. Complete the pattern - (0.5mx2=1m)
- 90, 81, 72, 63, _____, _____

SECTION - B

(2mx10=20m)

7. Write the predecessor and successor of 567899.
8. Estimate the sums to the nearest thousands - $7762 + 4223$
9. If the minuend is 785609 and the subtrahend is 71564, find the difference.
10. Multiply using the expanded method - 9876×8
11. In Rajdhani express 940 passengers are travelling. A packet of fruity drinks costing ₹12 is given to every passenger. What is the total cost of the drinks served in Rajdhani Express?
12. Find the multiples of 8 which are greater than 24 and less than 64.
13. Write the number name of 225405 using Indian system of numeration.
14. Find the prime factors of 128 using factor tree method.
15. Decode the message - 1 12 12 20 8 5 2 5 19 20
16. Draw the line of symmetry for the following figure -



SECTION - C

(3mx4=12m)

17. Find the LCM and HCF of 20,40 and 60.
18. Divide $6789 \div 52$. Find the quotient, remainder and check the division.
19. Subtract the following and check the answer with addition: $94350 - 6494$
20. 100 boxes of mangoes can be loaded in a truck. There are 3456 boxes of mangoes.
 - a) How many trucks are required to load 3456 boxes such that each truck is completely loaded?
 - b) Will there be any box left after loading?
 - c) How many boxes will be kept unloaded?

SECTION - D

(4mx2=8m)

21.
 - a) Find the HCF and LCM of 9 and 27.
 - b) Find the relationship between HCF and LCM of 9 and 27.
22.
 - a) Estimate the quotient - $862 \div 68$
 - b) 25 shirts costs ₹ 62500. Find the cost of 30 shirts.



DELHI PUBLIC SCHOOL RAMPURHAT

MID-TERM EXAMINATION

SESSION: 2024-2025

SUBJECT- SCIENCE

CLASS – IV

Time Allowed: 2 Hrs 15 Mins

Max. Marks: 50

General Instructions:

- (i) First 15 minutes are allowed only for reading the question paper. Students must NOT start writing during this time.
- (ii) This question paper consists of 2 printed pages.

SECTION - A

1. Choose the correct option:

(1mx5=5m)

- a) The substance that are needed by our body for its healthy functioning are called
 - i. Junk food
 - ii. Nutrients
 - iii. Roughage
 - iv. Water
- b) The organ that pumps blood to different parts of our body is
 - i. Kidney
 - ii. Liver
 - iii. Heart
 - iv. Lungs
- c) Animals that live on land are called
 - i. Arboreal
 - ii. Terrestrial
 - iii. Aerial
 - iv. Aquatic
- d) The green colour of a leaf is because of
 - i. Carbon dioxide
 - ii. Stomata
 - iii. Chlorophyll
 - iv. Oxygen
- e) The kind of soil containing tiny stones is
 - i. Humus
 - ii. Sand
 - iii. Gravel
 - iv. Clay

2. Fill in the blanks:

(1mx5=5m)

- a) Cheese, soya bean, meat and pulses contain _____.
- b) _____ carry the urine from the kidneys to the urinary bladder.
- c) _____ leaves help to trap a lot of sunlight.
- d) _____ is the breaking down of large rocks in small pieces or soil.
- e) _____ adaptation happens over a long period of time.

3. Match the column:

(1mx5=5m)

A

- a. Caterpillar to butterfly
- b. Streamlined body
- c. Cutting down of trees
- d. Urinary Bladder
- e. Body building food

B

- Storing urine
- Protein
- Metamorphosis
- Soil erosion
- Fish

4. NAME THE FOLLOWING:

(1mx3=3m)

- a. The body stores the extra of this nutrient for later use - _____
- b. The food made by a plant - _____
- c. The growing baby inside the egg - _____

5. WRITE TRUE OR FALSE:

(0.5mx4=2m)

- a. Mangroves have breathing roots to breathe and survive.
- b. Grasshoppers use camouflage for protection.
- c. Subsoil contains maximum humus.
- d. Blood flows through blood vessels in our body.

SECTION - B

6. ANSWER THE FOLLOWING IN BRIEF :

(2mx5=10m)

- a. What are some sources of Vitamin C ?
- b. What is the composition of soil?
- c. What is adaptation?
- d. Name the different organs of circulatory system.
- e. What are the various parts of a bird's egg?

SECTION - C

- 7. What is preservation? What are some methods of preserving food? **(1+5=5m)**
- 8. What is soil profile? Describe the various layers of soil with the help of a labelled diagram. **(2+3=5m)**
- 9. Draw a labelled diagram of excretory system. What is the role of kidneys in the excretory system? **(3+2=5m)**
- 10. What is a balanced diet? Differentiate between cooked food and raw food. **(2+3=5m)**



Delhi Public School Rampurhat

MID-TERM EXAMINATION

SESSION: 2024-2025

SUBJECT: SOCIAL STUDIES

CLASS – IV

Time Allowed: 2 Hrs 15 Mins

Max. Marks: 50

General Instructions:

- (i) Answer all questions.
- (ii) Write neatly and legibly.
- (iii) Use only black/blue ink for writing.
- (iv) First 15 minutes are allowed only for reading the question paper. Students must NOT start writing during this time.
- (v) This question paper consists of 2 printed pages.

Section A

Multiple Choice Questions:

(1x5=5)

1. The Thar Desert is located in _____.
(a) Punjab (b) Rajasthan (c) Gujarat (d) Uttar Pradesh
2. Afghanistan lies to the _____ of India.
(a) North-west (b) South-east (c) East (d) North
3. The capital of Gujarat is _____.
(a) Imphal (b) Itanagar (c) Gandhinagar (d) Aizawl
4. Mizo hill is a part of _____ range.
(a) Himalayan (b) Purvanchal (c) Trans-Himalayan (d) None of above
5. The river Hooghly flows through _____.
(a) West Bengal (b) Bihar (c) Arunachal Pradesh (d) Punjab

Section B

Fill in the Blanks:

(1x5=5)

6. The _____ Plateau is bounded by the Eastern and Western Ghats.
7. The _____ is the highest peak in India.
8. Meghalaya, land of the Khasi, Garo and Jaintia hills, shares its international borders with _____.
9. The _____ in the Himalayas, is the source of the river Ganga.
10. _____ is one of the important cash crops of Darjeeling.

Section C (Short Answer Questions)

Answer the following questions briefly:

(2x5=10)

11. What is the difference between Climate and weather?
12. What is a river basin? In which river basin does the state Haryana lie?

(1+1)

OR

Name the three main divisions of the Western Coastal Plains.

13. Which type of soil is good for cotton plant? Explain why? (1+1)
14. What is a plateau? Give an example of a plateau in India. (1+1)
15. How is the climate in the desert region?

OR

Why do you think Jammu and Kashmir has two capitals?

Section D

Answer the following questions in one word. (1x10=10)

16. What is the northernmost physical feature of India?
17. What is the longest river in India?
18. _____ is a roughly triangular shaped feature formed by the deposits brought by the river at the point where it enters the sea.
19. The Ganga and Brahmaputra rivers form the world's largest delta known as the _____.
20. Where are the ruins of the ancient university of Nalanda located?
21. What is the capital of Lakshadweep?
22. A _____ is a branch of a river that flows away from the main river and distributes its water into different channels or areas, typically forming a delta or an estuary.
23. The entire country of India is governed by whom?
24. What are the main crops of West Bengal?
25. Name a freshwater lake which is situated in our country?

Section E (Long Answer Questions)

Answer the following questions in details: (4x4=16)

26. Explain the significance of the Himalayan Mountain range for India. Include its impact on climate and rivers. (2+2)
27. Write a short note on different seasons of India.

OR

Describe the physical features of the Deccan Plateau. How does it affect the climate and agriculture of the region? (2+1+1)

28. Write about the major rivers of India and their significance to the Indian subcontinent. Include at least three rivers and their characteristics. (2+1+1)

OR

Discuss the differences between the Eastern Coastal Plains and Western Coastal Plains. Mention two ways a coast is useful for us? (2+2)

29. Who are banjaras? What are the various sources of livelihood for the people of Rajasthan? (1+3)

Section F (Map Work)

On a map of India, locate and mark the following: (1x4=4)

30. Indian Ocean.
31. The Himalayas
32. Any two neighbouring countries of India.
33. The Great Indian Desert



DELHI PUBLIC SCHOOL RAMPURHAT

MID-TERM EXAMINATION

SESSION: 2024-2025

SUBJECT: COMPUTER SCIENCE

CLASS – IV

Time Allowed: 2 Hrs 15 Mins

Max. Marks: 50

General Instructions:

- (i) First 15 minutes are allowed only for reading the question paper. Students must NOT start writing during this time.
- (ii) This question paper consists of 2 printed pages.

GROUP-A

A. Fill in the blanks:

(1X5=5)

- 1) Storage with capacity in _____ can hold a lot of information.
- 2) The _____ area on the taskbar displays notifications and system icon.
- 3) _____ keys press together to create a folder quickly.
- 4) The first network was called_____.
- 5) Devices in an IoT _____ our usage and can then perform tasks _____ to help us.

B. Tick (✓) the Correct option:

(1X5=5)

- 6) Which of the following is not a device?
a) Virus b) Pen c) Hammer d) Comb
- 7) Which of the following is a use of the Desktop Shortcut Menu?
a) To play song b) To access frequently used files
c) To personalize the desktop d) To play games.
- 8) Shortcut key for copy file?
a) Ctrl + S b) Ctrl + V c) Ctrl + X d) none of these
- 9) What is web browser?
a) A program that we see websites on the internet b) A device used to connect the internet
c) A collection of web pages d) None of these
- 10) What does IoT stand for?
a) Internet of thinkings b) impact of things c) Internet of technology d) Impact of technology.

C. Write T for True and F for False:

(1X5=5)

11) Things stored in cloud storage can be accessed from anywhere.

12) Booting is a process that takes place when the computer is switched on.

13) We are allowed to renames files, but not folder.

14) The DSL is the fastest type of internet connection.

15) All devices that can be connected on the internet are IoT enabled devices.

D) Match the Pattern:

(1X5=5)

A

B

16) Secondary Memory

a) Online Shopping

17) Windows key + Tab

b) Open task view

18) Windows key + I

c) Open setting menu

19) CERN

d) First Internet

20) ARPANET

e) ROM

GROUP-B (Short Answer Type Questions)

(2 X 9 = 18)

21) Why do we keep duplicate files or folders on a computer?

22) What do you mean by platters?

23) What is Toggle?

24) What is the purpose of Cortana search?

25) Write steps to create Folder.

26) How modem work on internet?

27) Difference between web pages and websites?

28) Write two features of IoT.

29) Write a short note on Screen saver.

GROUP-C (Long Answer Type Questions)

(3X4=12)

30) How is a smart speaker different from a regular speaker?

31) How does a search engine help us? Write use of bookmarks in web browser.

(1.5X2=3)


32) Briefly describe any three components of the taskbar.

33) Why do we use shortcut icons? What is URL?

(2+1=3)

OR

Write three practices of Good digital citizenship.



DELHI PUBLIC SCHOOL RAMPURHAT

MID-TERM EXAMINATION

SESSION: 2024-2025

SUBJECT: GENERAL KNOWLEDGE

CLASS – IV

Name: _____ Sec: _____ Roll No: _____

Invigilator's Sign: _____

Examiner's Sign: _____

Time Allowed: 45 Mins

Max. Marks: 25

*** All the Questions are compulsory: - (1x25=25)**

Q 1. On which date is the World Environment Day Celebrated every year?

Ans:

Q 2. Nek Chand has developed a beautiful Artwork from waste a Rock Garden in which Indian city?

Ans:

Q 3. Name the energy generated from the Sun?

Ans:

Q 4. Substance commonly used for making the lead of a pencil.

Ans:

Q 5. A place for keeping birds _____

Ans:

Q 6. Onam is the harvest festival of which state?

Ans:

Q 7. The Great Pyramid of Giza is situated on which place?

Ans:

Q 8. What is the capital of Telangana?

Ans:

Q 9. What is the capital of Uttarakhand?

Ans:

Q 10. Who is revered as the 'Iron man of India'?

Ans:

Q 11. Name the first woman president of India?

Ans:

Q 12. Who was the first Indian to fly on Space?

Ans:

Q 13. Who composed Vande Mataram ?

Ans:

Q 14. Who is known as the 'Architect of Indian Constitution'?

Ans:

Q 15. Who was the first Woman to join the Indian Police Services?

Ans:

Q 16. Which is the highest mountain peak in India?

Ans:

Q 17. Jog falls are located in which Indian state?

Ans:

Q 18. Which is the Oldest mountain range in India?

Ans:

Q 19. Which is the third largest Ocean in the World?

Ans:

Q 20. The Anantagiri Hills are located in which city?

Ans:

Q 21. Golden temple is situated in which city?

Ans:

Q 22. Which is Earth's only natural satellite?

Ans:

Q 23. Which Sport is also known as 'ping-pong'?

Ans:

Q 24. Who was the first Indian Lady to go into the Space?

Ans:

Q 25. Which Indian city gets its name from the Naini Lake?

Ans: